

Mathematics

Diagnostic Tests 500-800



Sunrise Edition



Name _____



MATH 500-800 Diagnostic Tests

Christian Light Education, a division of
Christian Light Publications, Harrisonburg, VA 22802
©1999 Christian Light Publications, Inc. All Rights Reserved.
Printed in the United States of America

2018 Printing

We have attempted to secure permission for all copyrighted material.
If further information is received, the publisher will be glad to properly credit the material in future printings.

MATH 500-800 DIAGNOSTIC TESTS

CONTENTS

Level 500, Sunrise Edition	1
Level 600, Sunrise Edition	10
Level 700, Sunrise Edition	18
Level 800, Sunrise Edition	26

The material in this book is
the product of the Lord's blessing
and many individuals working
together at Christian Light.



CHRISTIAN LIGHT
EDUCATION

Harrisonburg, Virginia
(540) 434-0750 www.christianlight.org

Notes for the Teacher

Why Diagnostic Testing?

Diagnostic tests are specifically designed to determine where a student should begin in the curriculum. Results from these tests give better direction for placement than a student's age or grade level since the course of study varies so much between schools and curricula.

What Portion of This Booklet Should a Student Complete?

This book covers four levels—500, 600, 700, and 800. Use this chart to decide which ones to work through.

Grade Student is Entering	Work through levels
2-5	Use test booklet 100-400.
6	500*
7	500-600
8	600-700
9	700-800
10 and up	Use test booklet 500-800.

*It is advisable that grade 6 students also work through test level 400.

How Should the Test be Administered?

Time. This is not a timed test. Students may take as much time as needed. Give periodic breaks, at least five to ten minutes every hour, and more often for younger students. Ideally, testing should be spread over a two-day period. Test weariness gives unreliable test results.

Guidance. You may help students understand instructions; however, do not hint at solutions to problems.

Calculators. Allow students to use a calculator for designated calculator exercises only.

Environment. Inform students that the test is important, but avoid a tense atmosphere. Help them to feel that the best they can do is good enough. Check comfort factors such as lighting and ventilation. Keep noise and other disturbances to a minimum.

Progress. For Levels 500-800 (Sunrise Math) The different concepts in *Sunrise Edition* are learned incrementally and spread throughout the year. The activities in the tests are grouped by concepts. The student should begin with the first concept and do as many activities as possible in each group.

How Do I Score the Test?

Using the answers in the Teacher's Manual, put a mark through the number of each question the student answered incorrectly.

For Levels 500-800 (Sunrise Math). Determine the number of activities done correctly for the level.

How Do I Then Determine Placement?

1. Fill in the **Diagnostic Test Summary** on the next page.
2. **For Level 500 (Sunrise Math).** If the student has 76 or more correct answers, he is prepared for Level 600. If less than 76 are correct, the student is not prepared for Level 600 and should begin with *Sunrise Math Level 500*.
3. **For Level 600 (Sunrise Math).** If the student has 61 or more correct answers, he is prepared for Level 700. If less than 61 are correct, the student is not prepared for Level 700 and should begin with *Sunrise Math Level 600*.
4. **For Level 700 (Sunrise Math).** If the student has 61 or more correct answers, he is prepared for level 800. If less than 61 are correct, the student is not prepared for Level 800 and should begin with *Sunrise Math Level 700*.
5. **For Level 800 (Sunrise Math).** If the student has 63 or more correct answers, he is prepared for level 900. If less than 63 are correct, the student is not prepared for Level 900 and should begin with *Sunrise Math Level 800*.

If you have questions or need further assistance, feel free to contact CLE by phone (540-434-0750), FAX (540-433-8896), E-mail (homeschool@christianlight.org), or write us at P.O. Box 1212, Harrisonburg, VA 22803-1212.



CHRISTIAN LIGHT
EDUCATION

Diagnostic Test Summary

Math 500-800

Name _____ Date _____

LightUnit	Amount Correct
-----------	----------------

Level 500 _____

Level 600 _____

Level 700 _____

Level 800 _____

Performance Level—Student will begin with Level _____

Level 500

Algebra

of 15 problems correct

Solve.

1. 5 squared = _____

2. 9 squared = _____

3. 2 squared = _____

4. $\sqrt{16} =$ _____

5. $\sqrt{49} =$ _____

6. $\sqrt{100} =$ _____

Simplify the expression.

7. $10 \div 2 + 6 \times 8$

8. $25 \div (10 - 5) + 3 \times 2$

Combine the integers.

9. $-2 + 4 =$ _____

10. $-3 + (-5) =$ _____

11. $4 + (-4) =$ _____

Solve and check the equations.

12. $n + 3 = 9$

Check

13.

14. $n - 4 = 9$

Check

15.

Level 500

Data

of 2 problems correct

Solve.

16. Grandma's Fruit Basket made 38 pints of jam on Monday, 44 pints on Tuesday, and 26 pints on Wednesday. What is the average number of pints of jam they made?

17. Swiss Pantry sold 160 coconut cakes the week of Christmas. What was the average number of cakes they sold in 5 days?

Decimal Computation

of 6 problems correct

Copy and solve.

18. $43 + 4.587 + 42.6 =$ _____

19. $93.01 - 5.159 =$ _____

Solve.

20. $24 \overline{)1.272}$

21. $36 \overline{)4.32}$

22. $\begin{array}{r} 0.236 \\ \times 0.25 \\ \hline \end{array}$

23. $\begin{array}{r} 1.42 \\ \times 0.3 \\ \hline \end{array}$

Decimal Concepts

 of 15 problems correct

Rewrite the fractions as decimals.

24. $\frac{1}{2} = \underline{\hspace{2cm}}$

25. $\frac{3}{4} = \underline{\hspace{2cm}}$

26. $\frac{1}{4} = \underline{\hspace{2cm}}$

Write the answers.

27. $0.3 \div 100 = \underline{\hspace{2cm}}$ 28. $12.3 \div 1,000 = \underline{\hspace{2cm}}$ 29. $472 \div 10 = \underline{\hspace{2cm}}$

30. $0.23 \times 1,000 = \underline{\hspace{2cm}}$ 31. $46 \times 100 = \underline{\hspace{2cm}}$ 32. $0.6 \times 10 = \underline{\hspace{2cm}}$

Match.

33. hecto

a. 10

36. milli

a. 0.1

34. kilo

b. 100

37. deci

b. 0.01

35. deca

c. 1,000

38. centi

c. 0.001

Division

 of 7 problems correct

Solve.

39. $4 \overline{)3,895}$

40. $24 \overline{)9,675}$

41. $50 \overline{)7,852}$

Level 500

42. $7 \overline{) \$45.64}$

43. $27 \overline{) 1,511}$

44. $45 \overline{) 369}$

45. $43 \overline{) 1,925}$

Fractions

of 10 problems correct

Solve.

$$7\frac{5}{6}$$

9

$$3\frac{3}{8}$$

$$15\frac{7}{9}$$

$$9\frac{1}{3}$$

46. $\underline{-5\frac{4}{6}}$

47. $\underline{+4\frac{1}{3}}$

48. $\underline{-9\frac{1}{3}}$

49. $\underline{-5\frac{5}{6}}$

50. $4\frac{1}{2} \times 6\frac{2}{3} = \underline{\hspace{2cm}}$

51. $4 \times 2\frac{1}{3} = \underline{\hspace{2cm}}$

52. $\frac{4}{5} \times \frac{2}{3} = \underline{\hspace{2cm}}$

53. $1\frac{1}{4} \div 7\frac{1}{2} = \underline{\hspace{2cm}}$

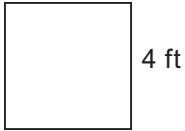
54. $3 \div 4\frac{1}{3} = \underline{\hspace{2cm}}$

55. $\frac{2}{3} \div \frac{3}{4} = \underline{\hspace{2cm}}$

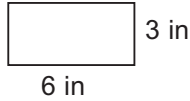
Geometry

of 16 problems correct

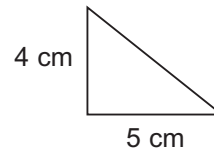
Write the formula and find the area.



56.



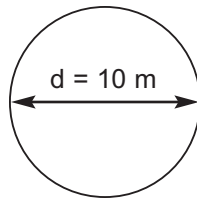
57.



58.

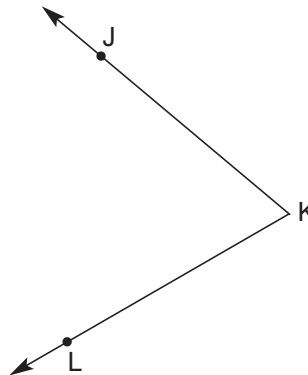
Write the formula and find the circumference.

59.



Follow the directions.

- 60. Measure the angle. _____°
- 61. Name the angle. _____
- 62. Name the vertex. _____
- 63. Draw a 145° angle.
- 64. Name it ∠DEF.
- 65. Are ∠JKL and ∠DEF congruent? _____

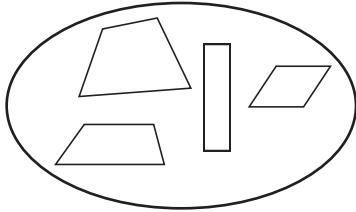


Level 500

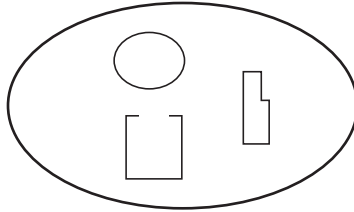
Answer the questions.

66. Which set has only quadrilaterals? _____

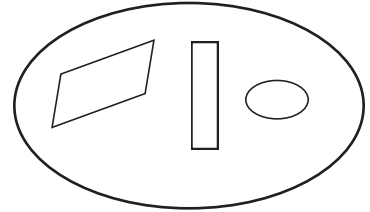
Set A



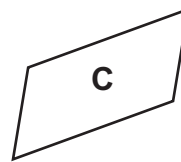
Set B



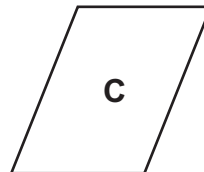

Set C



67. Which figure is not a parallelogram? _____



68. Which figure is not a rhombus? _____



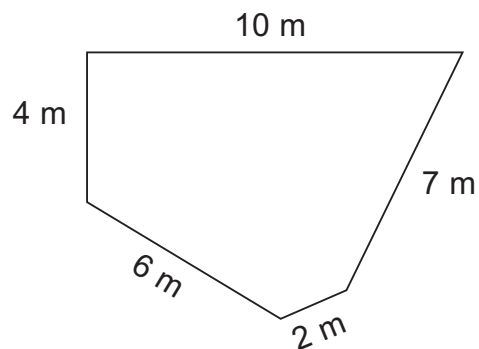
Fill in the blanks.

69. A circle has _____°.

70. A half circle has _____°.

Find the perimeter.

71. _____



Numbers

 of 13 problems correct

Write the digit that holds each place.

569,034,287,145,258

72. Hundred trillions place _____

73. Millions place _____

74. Ten billions place _____

Write the digit that holds each place.

123.059

75. Hundredths place _____

76. Thousandths place _____

Write the numbers.

77. Three trillion, four hundred twenty-five _____

78. Twenty-six thousandths _____

Write $<$, $>$, or $=$.

79. $0.02 \square 0.2$

80. $0.30 \square 0.3$

81. $0.4 \square 0.35$

Order the decimals from least to greatest.

82. 0.02 0.2 0.225 0.205 _____ _____ _____ _____

Match.

83. _____ prime numbers a. 25, 51, 39

84. _____ composite numbers b. 2, 3, 5, 7

Level 500

Percents

of 7 problems correct

Fill in the missing fractions, decimals, and percents.

Fraction	85. $\frac{1}{2}$ or $\frac{50}{100}$	86. _____	87. _____	88. $\frac{1}{4}$
Decimal	_____	0.38	_____	_____
Percent	_____	_____	75%	_____

Write equivalent fractions with denominators of 100. Then write them as percents.

89. $\frac{7}{20} = \frac{\quad}{100} = \quad\%$

90. $\frac{6}{25} = \frac{\quad}{100} = \quad\%$

91. $\frac{8}{10} = \frac{\quad}{100} = \quad\%$

Ratio and Proportion

of 6 problems correct

Change the ratios to fraction form. Multiply by 5 to make larger equivalent ratios.

92. 2 to 3 = $\frac{\quad}{\quad}$ = $\frac{\quad}{\quad}$

93. 9 : 5 = $\frac{\quad}{\quad}$ = $\frac{\quad}{\quad}$

Change the ratios to fraction form. Then reduce to simplest form.

94. 5 to 15 = $\frac{\quad}{\quad}$ = $\frac{\quad}{\quad}$

95. 6 : 4 = $\frac{\quad}{\quad}$ = $\frac{\quad}{\quad}$

Set up proportions and solve.

96. If it takes 96 ounces of milk for 8 children, how many ounces will it take for 3 children? _____

Set up proportions and solve.

97. If a snail crawls 3 centimeters in 2 minutes how long will it take to crawl 9 centimeters? _____

Rounding

of 12 problems correct

Round the numbers to the nearest . . .

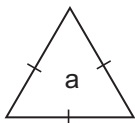
- | | | |
|---------------|--------------------------|--------------------------|
| hundred. | 98. 4,256 _____ | 99. 4,996 _____ |
| ten. | 100. 3,299 _____ | 101. 2,235 _____ |
| hundredths. | 102. 0.356 _____ | 103. 0.924 _____ |
| thousandths. | 104. 0.6139 _____ | 105. 0.2531 _____ |
| tenths. | 106. 0.213 _____ | 107. 0.396 _____ |
| whole number. | 108. 3.33 _____ | 109. 4.92 _____ |

Level 600

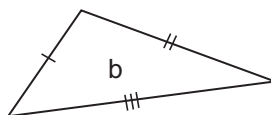
Geometry Facts and Applications

of 19 problems correct

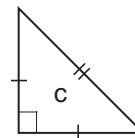
Classify the triangles by length of sides. Choose from *equilateral*, *isosceles*, or *scalene*.



1. _____



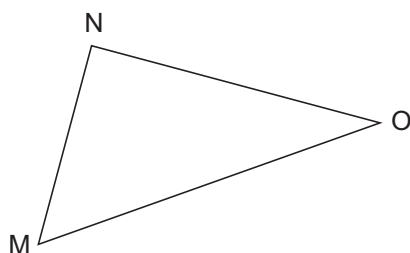
2. _____



3. _____

Classify by angle.

4. Which triangle is also a right triangle? _____



Measure the three angles of $\triangle MNO$. Write the answers.

5. $\angle N$ _____ $^\circ$ 6. $\angle O$ _____ $^\circ$ 7. $\angle M$ _____ $^\circ$

8. The sum of the measures of the three angles is _____ $^\circ$.

Fill in the blanks.

9. The sum of the angles in Figure 1 is _____ $^\circ$.

10. The sum of the angles in Figure 2 is _____ $^\circ$.

11. Name two chords from Figure 3. _____

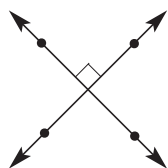


Figure 1

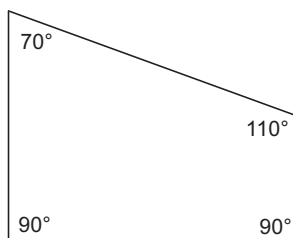


Figure 2

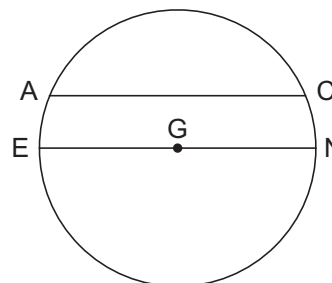


Figure 3

Answer the question.

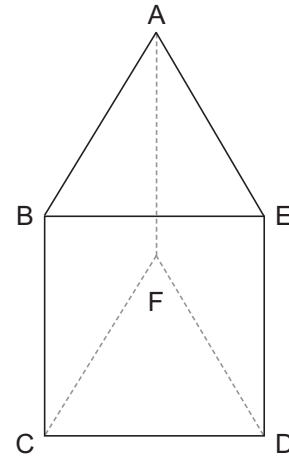
12. Which figure above is a trapezoid? _____

Fill in the blanks.

13. An acute angle measures between _____° and _____°.
 14. A straight angle has _____°.
 15. An obtuse angle measures between _____° and _____°.

Tell whether each part is a *face*, an *edge*, or a *vertex*.

16. BE _____ 18. A _____
 17. ABE _____ 19. BEDC _____

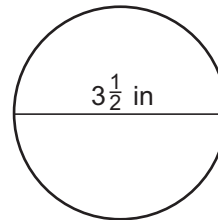


Geometry Formulas

of 5 problems correct

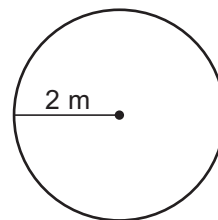
Use the formula to find the circumference of the circle. Use $\frac{22}{7}$ for π .

20. The circumference is _____.



Use the formula to find the area of the circle. Use 3.14 for π .

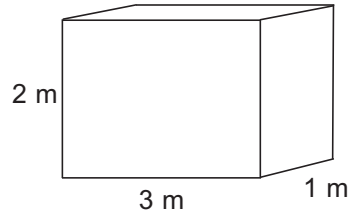
21. The area is _____.



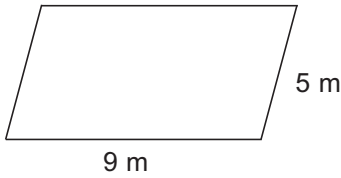
Level 600

Use the formula to find the volume.

22. The volume is _____.



Use the formula to find the perimeter of the parallelogram and rectangle.



23. The perimeter is _____.



24. The perimeter is _____.

Division

of 3 problems correct

Divide. Write any remainder with R.

25. $324 \overline{)6,846}$

26. $546 \overline{)3,642}$

27. $461 \overline{)9,983}$

Division with Decimals

of 7 problems correct

Convert to decimals rounded to the nearest hundredth.

28. $\frac{2}{3} \approx$ _____

29. $2\frac{3}{7} \approx$ _____

Divide. Write each quotient with a repeating bar.

30. $15 \overline{)13}$

31. $88 \overline{)112}$

Divide.

32. $0.7 \overline{)29.4}$

33. $1.24 \overline{)15.5}$

34. $1.53 \overline{)3.519}$

Percent Concepts and Applications

of 15 problems correct

Write the percents as decimals.

35. $44\% =$ _____ 36. $165\% =$ _____ 37. $340\% =$ _____ 38. $30\% =$ _____

Write the decimals as percents.

39. $0.23 =$ _____ 40. $0.8 =$ _____ 41. $2.13 =$ _____ 42. $5.6 =$ _____

Write each percent as a fraction or mixed number over 100. Reduce to simplest form.

43. $70\% =$ _____ $=$ _____ 44. $260\% =$ _____ $=$ _____

Convert to a decimal rounded to the nearest hundredth. Then write as a percent.

45. $1\frac{2}{9} \approx$ _____ $=$ _____
46. $\frac{5}{8} \approx$ _____ $=$ _____

Find the total cost.

47. \$8.25 with 5% sales tax = _____

Find the sale price.

The regular price was \$12.69.

The sale is 10% off.

48. The sale price is _____.

Find the final cost after the discount.

The cost was \$53 before a 5% discount.

49. The final cost is _____.

Fraction Multiplication

 of 3 problems correct

Multiply.

50. $\frac{2}{3} \times \frac{1}{2} \times \frac{6}{7} = \underline{\hspace{2cm}}$

51. $1\frac{4}{5} \times 3\frac{3}{4} \times 3\frac{1}{3} = \underline{\hspace{2cm}}$

52. $2 \times \frac{3}{4} \times 4\frac{1}{2} = \underline{\hspace{2cm}}$

Expressions and Equations

 of 17 problems correct

Simplify the expressions.

53. $(2 + 3)(7 - 4)$

54. $3 \cdot 7$

55. $7x + 4 + 6 - 3x$

Simplify the expressions. Substitute 10 for n .

56. $6n$

57. $\frac{n}{2}$

58. $\frac{30}{n}$

59. $4n + 3$

Solve and check.

60. $5n - 30 = 10$

61.

62. $7b + 17 = 45$

63.

Level 600

Finish showing the following properties using the variables a , b , and c .

64. The commutative property of addition $a + b =$ _____

65. The commutative property of multiplication $a \cdot b =$ _____

66. The associative property of addition $(a + b) + c =$ _____

67. The associative property of multiplication $(a \cdot b) \cdot c =$ _____

Use the distributive property to simplify these expressions.

68. $6(y + 4)$

69. $14(a + 2)$

Proportions

of 5 problems correct

Solve, using proportions if needed.

70. 36 months = _____ years

71. 9 feet = _____ inches

Solve. Use proportions if necessary. If the division does not come out evenly, round to the nearest whole number or percent.

72. What is 120% of 25? _____

73. 15 is 10% of what number? _____

74. 26 is what percent of 45? _____

Exponents, Integers, and Coordinates of 11 problems correct

Multiply to find the number.

75. $4^3 =$ _____

76. $2^4 =$ _____

Combine integers.

77. $-7 + (-4) =$ _____

78. $-11 + 14 =$ _____

79. $16 + (-16) =$ _____

Write the ordered pair for each point.

80. F _____

81. H _____

Write the point for each ordered pair.

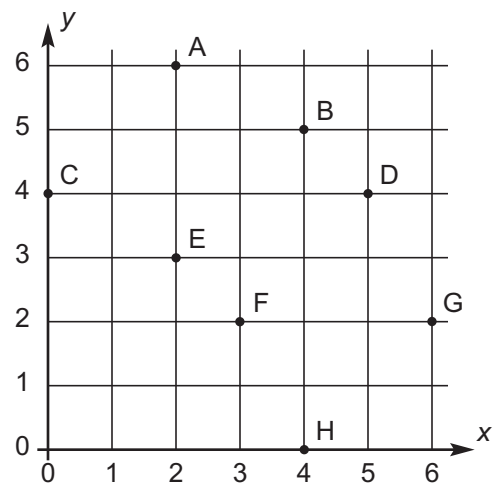
82. $(2, 3)$ _____

83. $(0, 4)$ _____

Plot these points on the grid.

84. K $(4, 3)$

85. J $(2, 0)$


Primes and Factors of 2 problems correct

List the prime factors for each number.

86. $210 =$ _____

87. $72 =$ _____

Level 700

Integers

of 12 problems correct

Change each subtraction to adding the opposite. Then combine.

1. $-2 - (-14)$

2. $5 - (+24)$

3. $3 - (-6)$

Write the products.

4. $-4 \times (-8) =$ _____

5. $-2 \times 10 =$ _____

6. $5 \times (-3) =$ _____

Write the quotients.

7. $-36 \div 4 =$ _____

8. $-42 \div (-6) =$ _____

9. $\frac{-15}{-3} =$ _____

10. $\frac{45}{-9} =$ _____

11. $-2 \overline{) -18}$

12. $3 \overline{) -33}$

Expressions

of 10 problems correct

Simplify the expressions.

13. $2n \cdot 5$

14. $7 \cdot 3c$

15. $(8y)9$

16. $(14)2x$

Simplify the expressions.

17. $7^2 - \frac{10}{2} + 3^2 \cdot 2^3$

18. $\sqrt{144} - \frac{35}{7} \cdot 2$

19. $8^2 - (10 + 4)3$

Simplify and solve.

20. $\frac{\frac{3}{4}}{3\frac{1}{2}} = \underline{\hspace{2cm}}$

21. $\frac{5}{2\frac{1}{2}} = \underline{\hspace{2cm}}$

22. $\frac{\frac{3}{4}}{12} = \underline{\hspace{2cm}}$

Solving Equations

 of 11 problems correct

Solve and check.

23. $12 + \frac{n}{5} = 22$

24.

25. $17 = \frac{n}{2} + 11$

26.

Solve. Write remainders as fractions in simplest form.

27. $5n - 8 = 14$

28. $6n + 8 = 13$

Level 700

Simplify and solve.

29. $n \cdot 2^3 = 8 \div 4 \cdot 4^2$

30. $6n - 2 = (10 + 1)2$

31. $7(x + 3) = 5 + 51$

32. $26 \div 2 \cdot 3 = 5n + 7n + 3 \cdot 5$

33. $3n + 6n - n = 28 \div 4$

Powers and Exponents

of 7 problems correct

Write the products.

34. $5^0 = \underline{\hspace{2cm}}$

35. $10^1 = \underline{\hspace{2cm}}$

36. $10^4 = \underline{\hspace{2cm}}$

Write as powers of 10.

37. $0.0001 = \underline{\hspace{2cm}}$

38. $1,000,000 = \underline{\hspace{2cm}}$

Write the products. Write fractions for those with negative exponents.

39. $3^{-2} = \underline{\hspace{2cm}}$

40. $5^{-3} = \underline{\hspace{2cm}}$

Fraction, Decimal, Percent Equivalents of 8 problems correct

Write the decimal equivalent for each fraction. Use a bar for repeating decimals.

41. The repeating decimal for $\frac{1}{3}$ is _____.
42. The repeating decimal for $\frac{5}{6}$ is _____.
43. The decimal for $\frac{1}{8}$ is _____.
44. The decimal for $\frac{5}{8}$ is _____.

Write the percent equivalent for each fraction. Write remainders as fractions of a percent.

45. $\frac{2}{3} =$ _____%
46. $\frac{1}{6} =$ _____%
47. $\frac{3}{8} =$ _____%
48. $\frac{7}{8} =$ _____%

U.S./Metric Conversions of 5 problems correct

Use the conversion ratios to convert from one measurement system to the other. Round each answer to the nearest whole unit.

49. 175 km \approx _____ miles
50. 62 in \approx _____ cm
51. 200 L \approx _____ gal
52. 61 kg \approx _____ lb
53. 125 yd \approx _____ m

Percents of 11 problems correct

Find the total income.

54. A salesman earns \$950 per month plus 8% commission sales of \$15,625. What was his income last month? _____

Level 700

Change to decimal percents, then to decimals.

55. $4\frac{3}{4}\%$ = _____ = _____

56. $\frac{3}{5}\%$ = _____ = _____

Solve. Round to the nearest whole number or the nearest cent.

57. 12% less than 25 = _____

58. 15% more than \$14.50 = _____

To the nearest whole percent, find the percent of increase or decrease.

59. A change from 55 to 125 is an increase of _____%.

60. A change from 40 to 35 is a decrease of _____%.

Solve.

\$3,500 deposited at $2\frac{1}{2}\%$ interest for 5 years.

61. Amount of interest earned: _____

62. Total principal with interest: _____

\$2,000 loaned out at 5% interest for $\frac{3}{4}$ year.

63. Amount of interest owed: _____

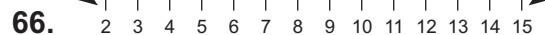
64. Total amount to repay: _____

Inequalities

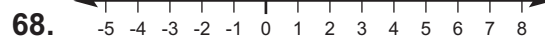
of 6 problems correct

Solve each inequality. Graph the solutions.

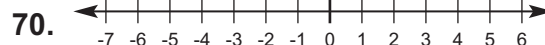
65. $x + 2 \geq 10$



67. $x + 3 < 3$



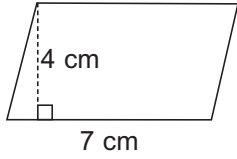
69. $x + 5 \leq 2$



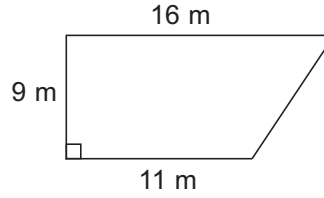
Area and Volume

of 6 problems correct

Use the formulas to find the areas of the parallelogram and the trapezoid.

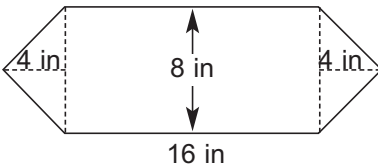


71. _____



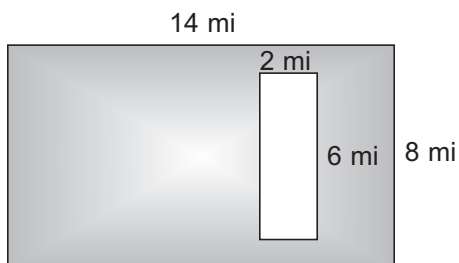
72. _____

Find the area. Show your work.



73. _____

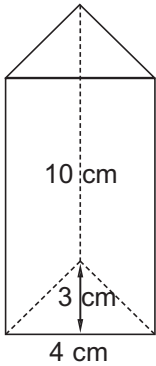
Find the area of the shaded part. Show your work.



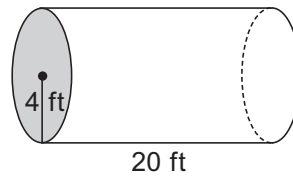
74. _____

Level 700

Use the formula to find the volumes of the triangular prism and the cylinder. Use 3.14 for pi.



75. _____



76. _____

Prime Numbers

of 5 problems correct

Find the prime factors and the GCF.

77. Prime factors of 36 = _____

78. Prime factors of 90 = _____

79. GCF = _____

List the prime factors using exponents.

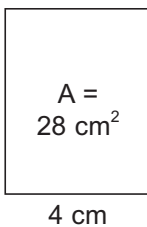
80. Prime factors of 625 = _____

81. Prime factors of 225 = _____

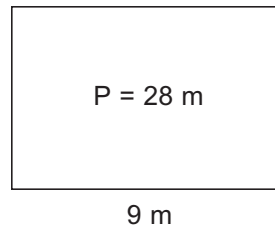
Missing Dimensions

of 6 problems correct

Use the area and perimeter formulas to find the missing dimension for each figure.

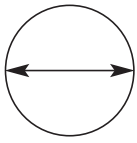


82. The length is _____



83. The width is _____.

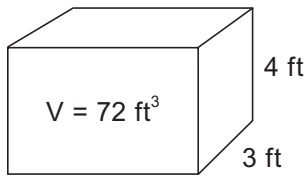
Use the circumference formula to find the diameter of the circle. Use 3.14 for pi.



$C = 20.41 \text{ cm}$

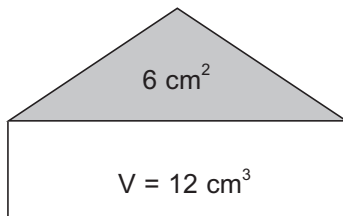
84. The diameter is _____.

Use the volume formula to find the length of the rectangular prism.



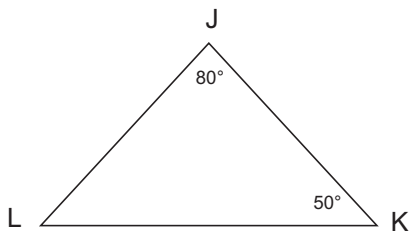
85. The length is _____.

Use the volume formula to find the height of the triangular prism.



86. The height is _____.

Solve for the unknown angle measure.



87. $\angle L = \text{_____}^\circ$

Level 800

Algebra

of 42 problems correct

Use the distributive property to simplify.

1. $-5(3n + 2)$

2. $-7(-6n - 4)$

Simplify.

3. $3 - 6 + 13 + 2 - 15$

4. $4 + 5 - 1 + 12 - 3 - 7$

Write the ordered pair for each point.

5. L _____

6. K _____

Write the letter of the point for each ordered pair.

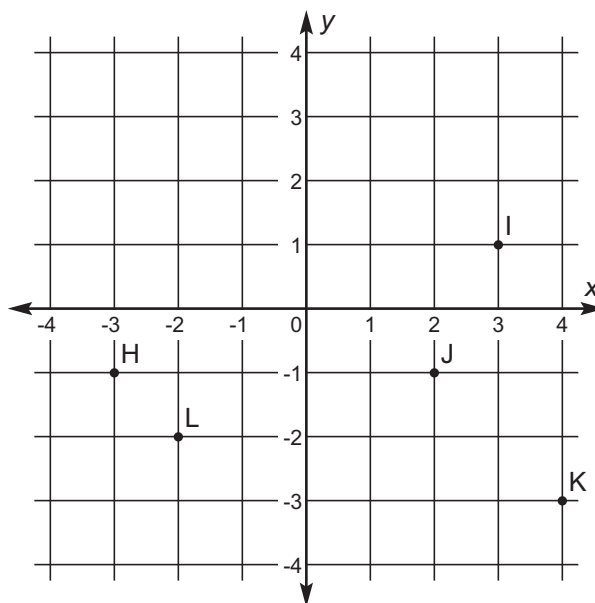
7. $(2, -1)$ _____

8. $(-3, -1)$ _____

Plot these points on the grid.

9. A $(1, -2)$

10. R $(-3, 3)$



Combine like terms.

11. $4b - 6b + 5d + 3 + 2d$

12. $3x + 7y - 10y + 2x + 6$

13. $\frac{-9x + 9y - 9}{-10y}$

14. $\frac{-9x + 9y - 9}{+3x}$

Simplify.

15. $6x^3 - 6x^2 + 4 - 2x^3 + 6$

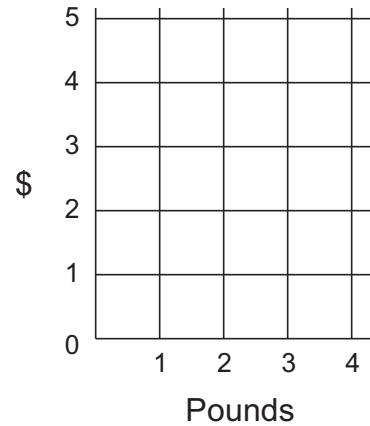
16. $\frac{7y^2 - 3y^2 + y}{+4y^2}$

Finish the table of values.

17. 1 pound of turkey cost \$1.50.

Pounds	\$
1	
2	
3	

18. Plot the points on the graph and draw the line for the linear relation.



Simplify.

19. $6a^2 \cdot a^2 \cdot 3b$

20. $y^3 \cdot 4y^3 \cdot y^3$

Solve. Find the square root of each perfect square. If the square is not a perfect square, leave your answer under the radical sign.

21. $y^2 = 21$

22. $x^2 = 9$

23. $x^2 - 18 = 18$

Simplify.

24. $4\{[18 \div (2 + 1) + 6] - 12\}$

25. $\{[4 + (6 \cdot 3) + 2] \div 4 + 2\}2$

Reduce to simplest form.

26. $\frac{8x^2}{4y^3} =$

27. $\frac{14x^3y}{7x^2} =$

Simplify these expressions. Write the answers only.

28. $\frac{y^2}{y^{-2}}$

29. $x^4 \div x$

30. $\frac{t^3}{t^7}$

31. $s \div s^3$

Level 800

Solve the equation for each value on the table and list the ordered pairs. Then graph the equation.

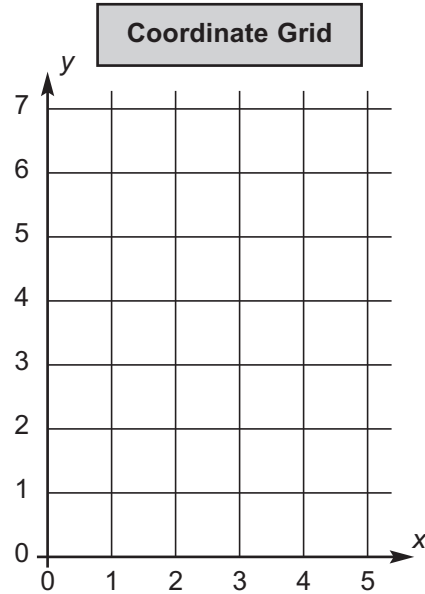
32. $5 = x + y$

Table of Values	
x	y
0	
1	
2	
3	

33.

Coordinates

34.



Simplify.

35. $\frac{9 - 2 \cdot 3 + 4}{7 \cdot 3 + 6} =$

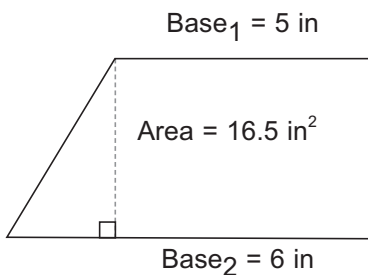
36. $\frac{3 + 5 \cdot 3}{6 \cdot 2 \cdot 3} =$

Solve.

37. $\frac{1}{4}x = 12$

38. $\frac{1}{3}x = 15$

Find the height of the trapezoid using fractional coefficients.



39. The height of the trapezoid is _____.

Solve.

40. $-8a = 24$

41. $-3x = 16$

42. $-n = 10$

Interest

of 8 problems correct

Solve. You may use a calculator for these exercises.

\$4,500 loaned out at 5% interest for 90 days.

43. Amount of interest: _____

44. Total principal with interest: _____

\$625 deposited at 5% interest for 8 months.

45. Amount of interest earned: _____

46. Total principal with interest: _____

Write as dollars.

47. 12.4 cents = _____

48. 123.3 cents = _____

Write as cents.

49. \$0.491 = _____

50. \$0.319 = _____

Factors

of 2 problems correct

Find the LCM for the following sets of numbers. Use the steps below.

51. 25 and 30

List the prime factors with exponents for 25. _____

List the prime factors with exponents for 30. _____

List each prime factor with the largest exponent. _____

LCM = _____

Level 800

52. 9, 36 and 54

List the prime factors with exponents for 9. _____

List the prime factors with exponents for 36. _____

List the prime factors with exponents for 54. _____

List each prime factor with the largest exponent. _____

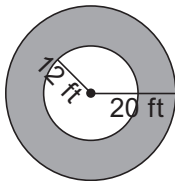
LCM = _____

Geometry

of 16 problems correct

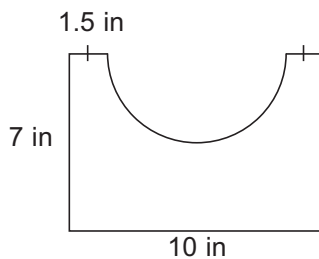
Find the area of the shaded part. Use 3.14 for pi. Show your work.

You may use a calculator for these exercises.



53. _____

Find the area of the irregular shape. Use $\frac{22}{7}$ for pi. Show your work.



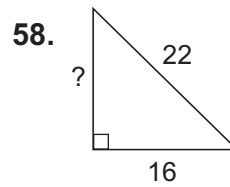
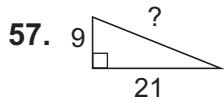
54. _____

Fill in the blanks.

55. The *perpendicular* symbol is _____.

56. The *parallel* symbol is _____.

Using the Pythagorean theorem and a calculator, find the lengths of the missing sides. Round your answers to the nearest tenth. You may use a calculator for these exercises.



Solve the equation for each x value and complete the tables.

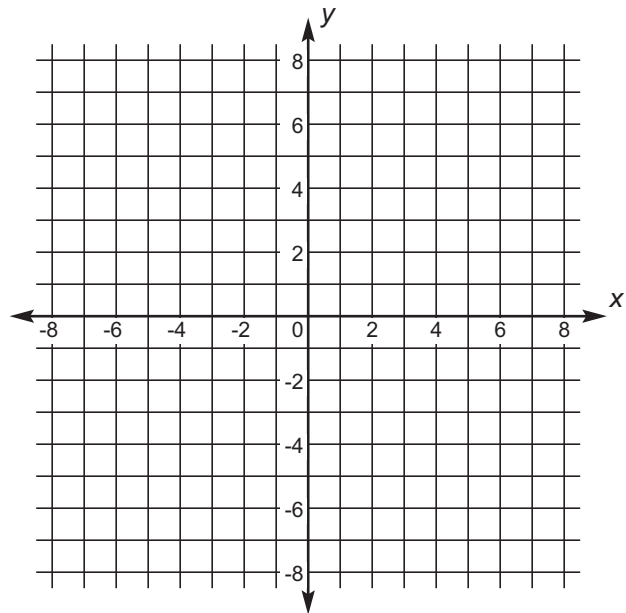
59. $x + 2 = y$

x	y
0	
2	
4	

60. Graph the solution.

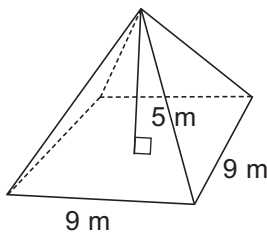
61. $\frac{x}{3} - 6 = y$

x	y
0	
6	
-6	



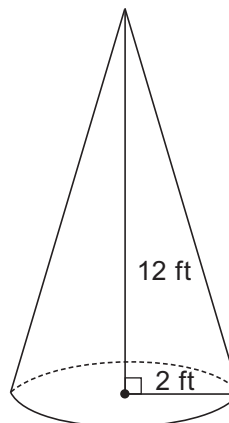
62. Graph the solution.

Find the volume of the pyramid. Formula: $V = \frac{1}{3} Bh$



63. _____

Find the volume of the cone. Formula: $V = \frac{1}{3} Bh$



64. _____

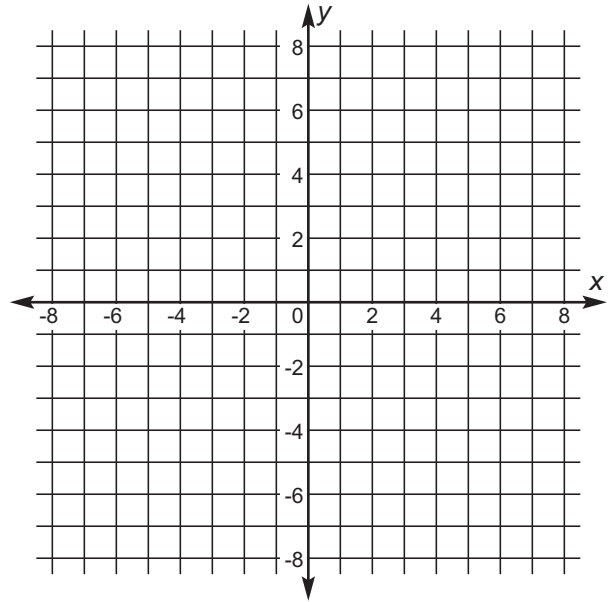
Level 800

Find the distances between the points on the graph to the nearest tenth of a unit. You may use a calculator for these exercises.

65. From $(-4, 2)$ to $(-8, 4)$ is _____ units.

66. Graph the solution.

67. From $(3, -2)$ to $(7, -7)$ is _____ units.



68. Graph the solution.

Numbers

of 18 problems correct

Label each number *rational* or *irrational*.

69. π _____

70. 6.5 _____

71. $\frac{80}{64}$ _____

72. $0.\bar{3}$ _____

73. $\frac{5}{11}$ _____

74. $\sqrt{3}$ _____

Change the following numbers to standard notation.

75. $3.42 \times 10^4 =$ _____

76. $5.09 \times 10^{-6} =$ _____

Change the following numbers to scientific notation.

77. 4,370,000 = _____

78. 0.0024 = _____

Multiply the numbers in scientific notation.

79. $(0.4 \times 10^3)(6 \times 10^5) =$ _____

80. $(1.4 \times 10^{-3})(3 \times 10^{-6}) =$ _____

Divide these numbers in scientific notation.

81. $(6.3 \times 10^3) \div (3 \times 10^2) =$ _____

82. $(10.2 \times 10^4) \div (2 \times 10^{-5}) =$ _____

Multiply or divide in scientific notation. Make sure your answers are in correct scientific notation.

83. $(5 \times 10^{-4})(3 \times 10^2) =$ _____

84. $(3.5 \times 10^7)(7 \times 10^9) =$ _____

85. $(6.4 \times 10^3) \div (8 \times 10^8) =$ _____

86. $(8.1 \times 10^6) \div (9 \times 10^{-3}) =$ _____

Percents

of 4 problems correct

In the first blank, write the decimal equivalent of the percent. In the second blank, round the decimal equivalent to the nearest thousandth.

87. $11\frac{2}{3}\% =$ _____ \approx _____

88. $3\frac{3}{8}\% =$ _____ \approx _____

Convert each percent to a decimal rounded to the nearest thousandth. Solve.

89. What is $16\frac{1}{3}\%$ of 70? _____

90. What is $6\frac{5}{8}\%$ of 25? _____



CHRISTIAN LIGHT
EDUCATION

746450
MATH 500-800
DIAGNOSTIC TESTS

